

NAME: _____



Purpose

To practice writing and drawing benchmark decimal amounts in tenths, hundredths, and thousandths

Math Words

places

4.012 has three places to the right of the decimal point.
We say: "four and twelve thousandths."

word form

"Fourteen hundredths" is a decimal number
written in word form.

**standard
form**

0.14 is a decimal number written in standard form.

Starter Problem

Draw and label a picture to show the decimal number
two hundred fifty thousandths.

NAME: _____

Starter Problem

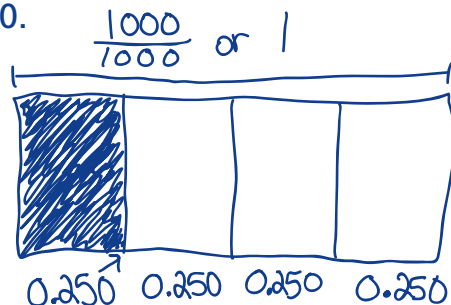
Draw and label a picture to show the decimal number two hundred fifty thousandths.

Student Thinking



Caley

I drew a rectangle and thought of it as 1,000 thousandths, or 1. So 250 thousandths is a fourth of it. Thousandths need three places, so I wrote 0.250.



Hatim

I don't think I can draw it because it's too many parts. I write it just like it sounds, "two hundred fifty thousands."

250.1000

Pitfall

Things to Remember

*

*




NAME: _____


Our Turn

1. Write one hundred six thousandths in standard form.

2. Write the standard form and show a drawing of five hundredths.



3. Write the standard form and show a drawing of five hundred thousandths.



NAME: _____

My Turn

1. Write the standard form and show a drawing of five tenths.

2. Write the standard form and show a drawing of two hundred thousandths.

3. Write the standard form and show a drawing of 50 hundredths.

NAME: _____

Multiple Choice Mini Lesson

Fill in the circle next to the answer you choose.

1. 50 thousandths = _____

☐ 50.000☐ 50.1000☐ 0.050☐ 0.50

2. 10 hundredths = _____

☐ 10.100☐ 10.00☐ 0.10☐ 0.010

NAME: _____

Multiple Choice Mini Lesson

Fill in the circle next to the answer you choose.

1. 50 thousandths = _____

☐ 50.000☐ 50.1000☐ 0.050☐ 0.50


2. 10 hundredths = _____

☐ 10.100☐ 10.00☐ 0.10☐ 0.010

NAME:

Writing Task Mini Lesson

Explain how you know that the shaded part of this drawing shows 400 thousandths of the whole square.



Naming and Drawing Decimal Amounts

NAME:

Writing Task Mini Lesson

Explain how you know that the shaded part of this drawing shows 400 thousandths of the whole square.

